

## HOLIDAY HOMEWORK

**SESSION- 2025-26**

### CLASS-V



Month of May brought long, hot days,  
And now we have our summer holiday  
Summer holidays mean no to school,  
Waking up late with no set rule.  
Little home work, easy to be done,  
Lesser studies and lot's of fun.  
Playing and talking and watching cartoon,  
Fun continues till the end of June.  
Beautiful time comes once in a year,  
Summer holidays are best days ever.

## ग्रीष्मावकाश कार्य

### कक्षा - पाँचवीं

1. दिए गए शब्दों से चार  
शब्दों की लड़ी तैयार करें -

क. बादशाह

ख. बीज

ग. सरदार

2. स्वर, व्यंजन की परिभाषा लिखें तथा इनकी  
संख्या भी बताएं।

3. दिए गए शब्दों से व्यक्ति वाचक और जाति  
वाचक संज्ञा शब्दों को अलग करें-

नदी, वल्लभ भाई, पेड़, पिता जी, पहाड़,  
गाँव, होजा, खिलौने, पक्षी, इंग्लैंड।

3. बादशाह अकबर -बीरबल, तेनालीराम और  
मुल्ला नसरुद्दीन की एक रोचक कहानी वाचन के  
लिए तैयार करें।



4. अपने आस-पास पाए जाने वाले वृक्षों के पाँच चित्र बनाए एवं उनके नाम लिखें। उन वृक्षों से हमें क्या लाभ होता है यह भी बताइए।

5. नीचे दिए गए शब्दों से एक मुहावरा बनाए और उसका अर्थ लिखें -

क. हाथ

ख. आँख

ग. घी

घ. दाँत


ङ. ईद

6. चित्र को देखकर पाँच वाक्य लिखें।




## 7.वर्ग पहेली से सभी महीनों के नाम लिखें।

वर्ग पहेली में से सभी महीनों के नाम ढूँढिए।



जु	मा	र्च	अ	ग	स्त	ड
ला	ड	ट	अ	क्तू	ब	र
ई	सि	त	म्ब	र	ल	फ
अ	ह	जू	न	क	प	र
प्रै	म	न	व	म्ब	र	व
ल	दि	स	म्ब	र	म	री
ड	ज	न	व	री	ई	ज



# English Holiday Homework

2024-25

Name: \_\_\_\_\_

Class: \_\_\_\_\_



Name \_\_\_\_\_

Date \_\_\_\_\_



# Abstract Nouns

Fill in the blanks with correct abstract noun from word bank.

wisdom	strength	happiness	beauty	trust
gratitude	bravery	love	honesty	growth

- The \_\_\_\_\_ of the painting is remarkable.
- Her \_\_\_\_\_ was evident from the smile on her face.
- Without \_\_\_\_\_, we wouldn't have achieved victory.
- His \_\_\_\_\_ earned him great respect.
- We appreciate the \_\_\_\_\_ you show towards others.
- Patience is a form of \_\_\_\_\_.
- The \_\_\_\_\_ of the company was surprising.
- Can you explain the \_\_\_\_\_ behind your decision?
- We owe him our \_\_\_\_\_ for his help.
- \_\_\_\_\_ is an essential part of any relationship.



### TOPIC : PICTURE COMPOSITION

Q. Look at the picture carefully and complete the sentences using the words from the help box :



Painting , swing football , reading , six playing , sitting , park , happy, two

1. This is a scene of a \_\_\_\_\_ .
2. The children are \_\_\_\_\_ .
3. A girl is making a \_\_\_\_\_ .
4. One boy is \_\_\_\_\_ a book .
5. Two boys are playing with a \_\_\_\_\_ .
- 6 . Another boy is \_\_\_\_\_ on the tree .
7. A girl is on the \_\_\_\_\_ .
8. There are \_\_\_\_\_ trees.

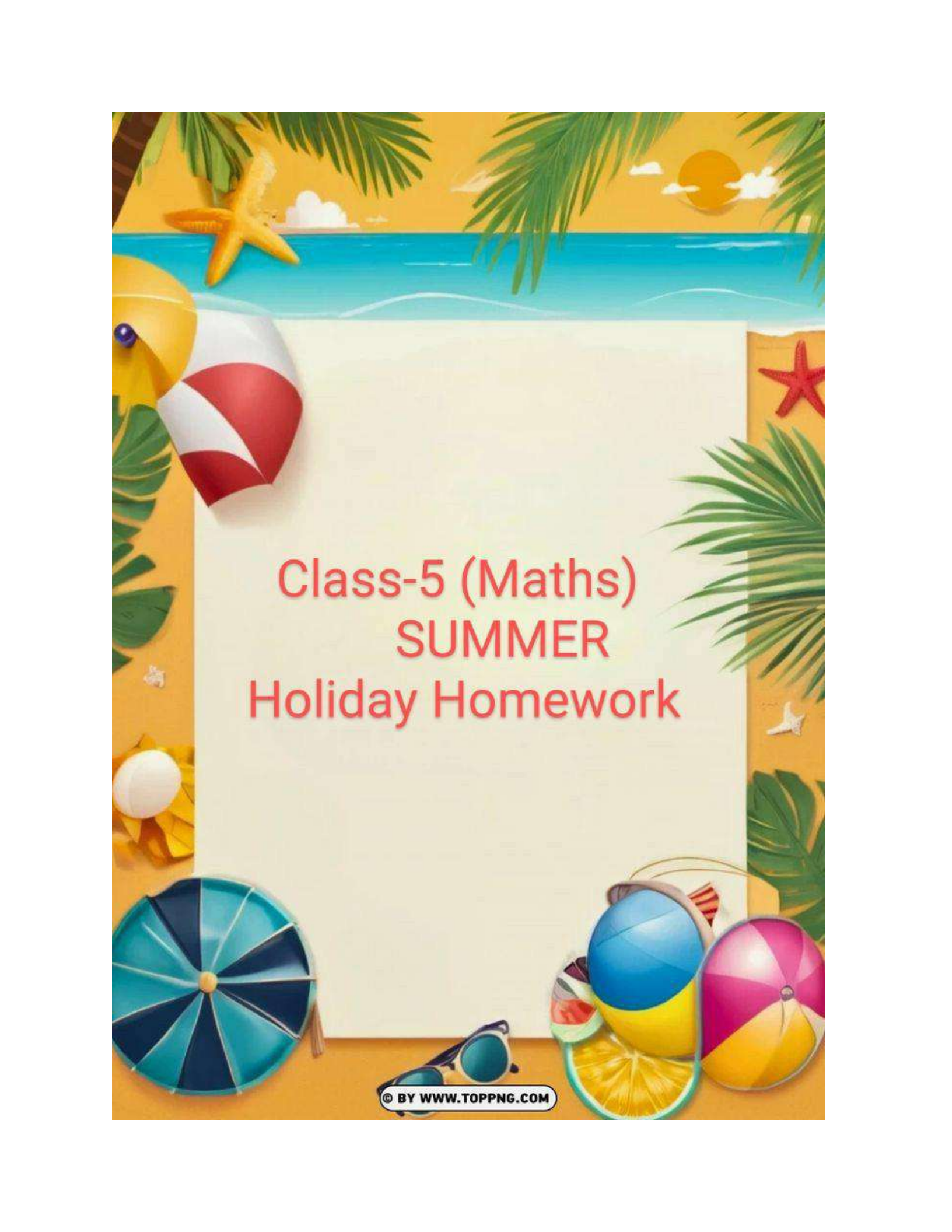
Q. MENTION THE NAMES OF YOUR  
FRIENDS AND WRITE WHY(in one sentence)  
Write in the form of a webchart.

Q. READ THE STORY "SWAMI AND  
FRIENDS" BY R.K.NARAYAN.

Mention atleast three main characters from the  
above mentioned story.

1. \_\_\_\_\_
2. \_\_\_\_\_
3. \_\_\_\_\_



The background is a vibrant summer scene. At the top, there's a blue sky with a yellow sun, white clouds, and green palm fronds. Below the sky is a blue ocean with white waves. A yellow starfish is on the left side of the ocean. In the center, there's a large white rectangular box with a subtle shadow, containing the text. To the left of the box, there's a red and white striped beach ball and a yellow beach umbrella. To the right, there's a red starfish and a green palm frond. At the bottom, there's a blue and white striped beach ball, a blue and yellow beach ball, a pink and yellow beach ball, a slice of watermelon, a slice of orange, and a pair of blue sunglasses. The entire scene is set on a sandy beach.

# Class-5 (Maths) SUMMER Holiday Homework

**SUBJECT – MATHEMATICS**

**Class – V**

**Ch-1 Numbers**

**Competency based Questions**

1) What must be added to 81,639 to get 9 ten thousand?

2) If the alphabet A=35 , E = 50 , T = 67

Then ATE = 356750, Decode the following

EAT = \_\_\_\_\_ ,      TEA = \_\_\_\_\_

a) Write the numbers you get in words according to the Indian place value system.

b) Also, find the greatest of these numbers.

3) Use the digits 6, 0, 4 to build the greatest number which is

a) less than M

b) less than D

( Hint - Roman numeral M and D stands for \_\_\_\_ and \_\_\_\_ )

4) Write Yes or No for the following situations.

a) The school starts at 7:35 a.m. Can it be rounded off to 7:40 a.m.?

b) There are 197 students in a school. Can it be rounded off to 200?

5) Blanks

a) 1000 ones = \_\_\_\_\_ thousand

b) 1 lakh = \_\_\_\_\_ hundred

c) 1 thousand = \_\_\_\_\_ tens

d) 1 lakh = \_\_\_\_\_ thousand

6) Fill in the boxes with correct digits.

$$\begin{array}{r} 4 \square 7 3 9 \square \\ + \square 3 2 6 \square 5 \\ \hline 7 8 9 9 9 9 \end{array}$$

**Q-I. Fill in the blanks**

- a. Smallest 8 digit number is \_\_\_\_\_.
- b. \_\_\_\_\_ lakhs = 1 crore
- c. One lakh = \_\_\_\_\_ thousands
- d. 100 hundreds = \_\_\_\_\_ thousands.
- e. Hundreds place is in \_\_\_\_\_ period.
- f. 1000 more than 39,999 is \_\_\_\_\_.
- g. 8 digit number begins with \_\_\_\_\_ place (Indian system).
- h. The number before 6,70,000 is \_\_\_\_\_.
- i. The number after 3,25,999 is \_\_\_\_\_.
- j. The next two numbers in the pattern is 12,93,997 ; 12,93,998 ; \_\_\_\_\_ ; \_\_\_\_\_.
- k. There are \_\_\_\_\_ 6 digit numbers in all.
- l. 37,465 rounded to the nearest 100 is \_\_\_\_\_.
- m. One less than the smallest 7 digit number is \_\_\_\_\_.
- n. 9,32,961       9,613      Put (> , < or =)
- o. The difference between the place value and face value of 6 in 28639 is \_\_\_\_\_.

**Q-II Choose the correct answer.**

1. 100 lakh is also called \_\_\_\_\_  
(10 million, 10 crore, one million)
2. 7 digit number begins with \_\_\_\_\_ place.  
(10 million, 10 lakh, one crore)
3. 1 crore = \_\_\_\_\_ million.  
(10, 100, 1000)
4. The digit 9 in the numeral 92,35,625 is in \_\_\_\_\_ period.  
(ten lakhs, thousands, lakhs)



## 2. How many total numbers are there which have:

- (i) one digit
- (ii) two digits
- (iii) three digits
- (iv) four digits

### Section

Satish is a 13 year old boy. His father had taken a loan for farming. But the crops failed. Now Satish's mother has to pay Rs 5000 every month for the loan.

Satish started working — he looked after 17 goats of the village.

He earns Rupee 1 everyday for one goat.

✦ How much will he earn in one month?

✦ Does he earn enough to help pay the loan every month?

✦ How much will he earn in one year?



### Section

#### ACTIVITY TIME-

#### NUMBERS AROUND US

Explore large numbers in your surroundings and write them in the given table.  
(Do this activity on a A-4 size coloured sheet)

S.NO	TYPE OF NUMBER	NUMBER	NO. OF DIGITS
1	MOBILE NUMBER	9891567123	10
2			
3			
4			
5			
6			
7			
8			

# **HOLIDAY HOMEWORK ASSIGNMENT**

## **CLASS V**

### **SCIENCE**

**Do the following questions in Science holiday homework Notebook:**

- 1. Find out how your external ear compares with that of the external ear of other mammals like cow, horse and elephant. What differences are there? Also find out about any other functions performed by the external ear of these animals.**
- 2. Do you breathe even when you are sleeping? Give reason for your answer.**
- 3. Draw well-labelled diagrams of five different seeds in your notebook.**
- 4. Learn and write keywords of Chapter 1 and Chapter 2.**
- 5. Revise all chapters taught in class.**
- 6. Activity-**  
**Take some seed of pea, maize, gram, rice wheat moong, soyabean and rajma. Soak them in water overnight. Split and observe the number of cotyledons in them. Write the name**

**of seeds with one cotyledon and two cotyledons.**

**7. Project work-**

**Make a model of human skeleton using cardboard and matchsticks.**

**Or**

**Make a working model of human breathing system using bottle, balloon, etc.**



# SST HOLIDAY HOMEWORK



DAV PUBLIC SCHOOL BARIATURANCHI

HOLIDAY HOMEWORK

Subject- Social science

CLASS-5

TO BE DONE IN SCRAP BOOK OR A4 SIZE PAPERS IN STICK FILE

- 1) **Paste** a family photograph and write two lines on each of them.
- 2) Write a recipe of a healthy food which you like and can prepare yourself.
- 3) Find out the names of some organizations that help the victims of natural calamities.
- 4) Find out the names of three animals and three birds who travel long distances to migrate and then go back to their original homelands.
- 5) Observe your colony /village and write down the types of houses and materials used to make them.

6) Be the change you wish to see in the world .List any two changes that you wish to bring in the world.



7) Paste or draw different types of shelters.

8) Make a small model of any type of shelter .(Don't use THERMOCOL sheet)

9) Complete all the assignments given till date in your notebook.

10) Learn the answers of the lessons till taught.

11) Practice the maps of chapter 2 and 3.

## SANSKRIT HOLIDAY HOMEWORK

ग्रीष्मावकाश गृहकार्यं

वर्ग -पंचम

बालक शब्दरूपम् स्मरन्तु लिखन्तु च।

पठ् ( लट् लकारे ) स्मरन्तु लिखन्तु च।



2. अधुना लिखन्तु एते के?

(क)



एषः.....अस्ति।

(ख)

एषः.....अस्ति।



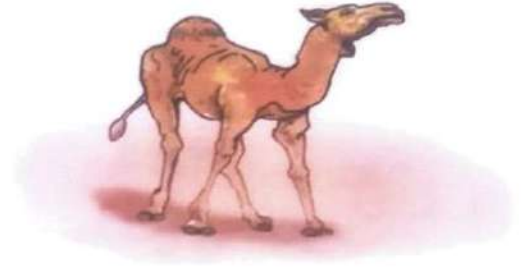
(ग)



एषः.....अस्ति।

(घ)

एषः.....अस्ति।



(ङ)



एषः.....अस्ति।

15


(च)



एषः.....अस्ति।

(छ)

एषः.....अस्ति।



(ज)



एषः.....अस्ति।

1. चित्राणि दृष्ट्वा नामानि लिखत-

(क) एतत् ..... अस्ति।



(ख)



एतत् ..... अस्ति।

(ग) एतत् ..... अस्ति।



(घ)



एतत् ..... अस्ति।

(ङ) एतत् ..... अस्ति।



(च)



एतत् ..... अस्ति।

(छ) एतत् ..... अस्ति।



अभ्यासः

1. चित्रं दृष्ट्वा खगस्य नाम लिखत-

(क) एषः ..... अस्ति।



(ख)



एषः ..... अस्ति।

(ग) एषः ..... अस्ति।



(घ)



एषः ..... अस्ति।

(ङ) एषः ..... अस्ति।



(च)



एषः ..... अस्ति।

(छ) एषः ..... अस्ति।





पञ्चपशूनाम् पक्षीणाम्, फलानाम्, शाकानाम्  
नामानि लिखित्वा चित्रम् अपि रचयित्वा  
रञ्जयन्तु च।

( पांच पशुओं पक्षियों फलों और सब्जियों  
के नाम लिखें और A4 साइज पेपर में या  
स्क्रेपबुक में चिपकाए या बनाएं।)

**Class – 5**  
**Subject - Computer**

**Learn:**

**Difference between:**

- a. Primary RAM and ROM**
- b. Primary memory and Secondary memory**

**Write:**

- a. Write one main difference between hardware and software. Give two examples of each.**
- b. Write any five components of Microprocessor.**

**Activity:**

- a. Rearrange the memory devices according to their capacity to store data in ascending order.**
- b. Find out the storage capacity of your computer, smart phones, pen drives, CD, DVD, Floppy Disc.**

**Project:**

**Draw, name and colour 5 different types of Storage device on a chart paper.**